

Name: _____

Date: _____



Types of Angles 3



L.O. - To identify types of angles

What type of angle?

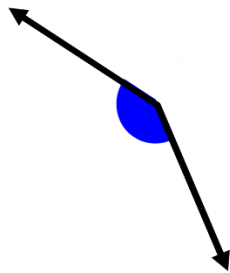
reflex

obtuse

acute

right angle


1)



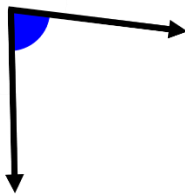
2)



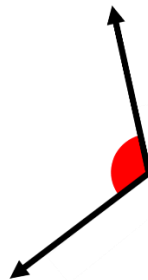
3)



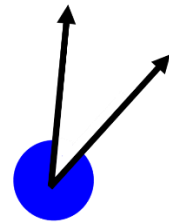
4)



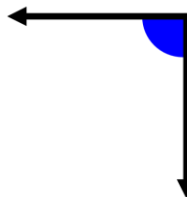
5)



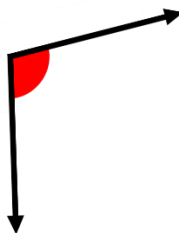
6)



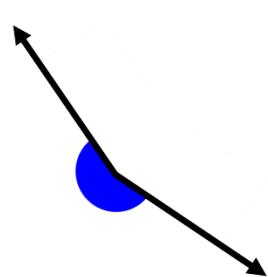
7)




8)



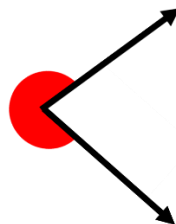
9)



10)



11)



12)

